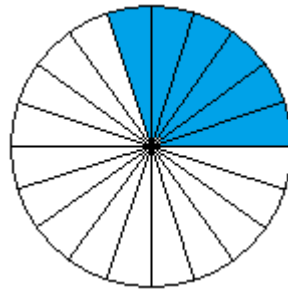
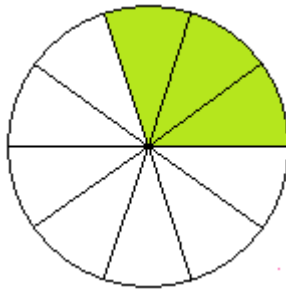
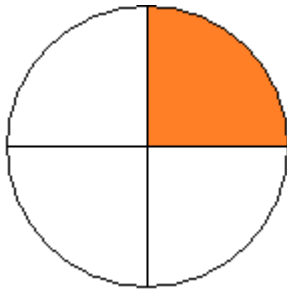


## Klapptest - Bruchteile 1

Falte das Blatt entlang der Linie. Welche Brüche werden dargestellt? Schreibe die Bruchzahlen auf die Linie..



$\frac{1}{4}$      $\frac{3}{10}$      $\frac{6}{20}$

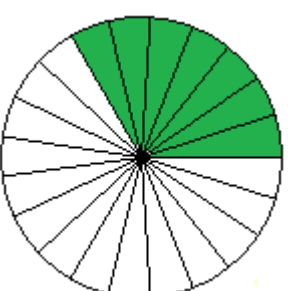
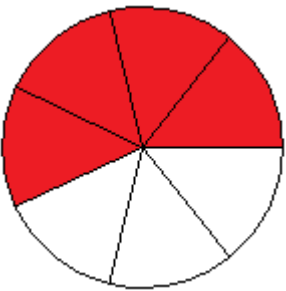
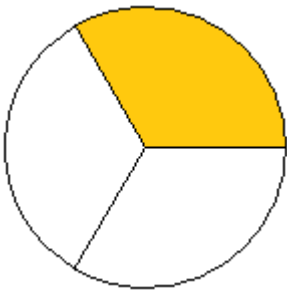
---



---



---



$\frac{1}{3}$      $\frac{4}{7}$      $\frac{7}{21}$

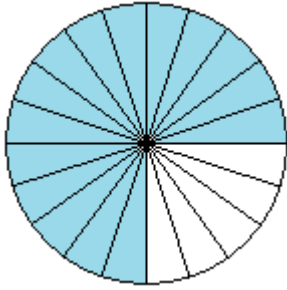
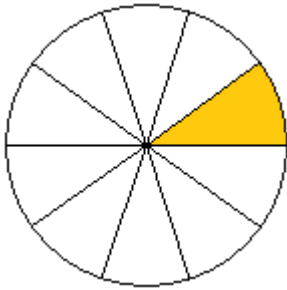
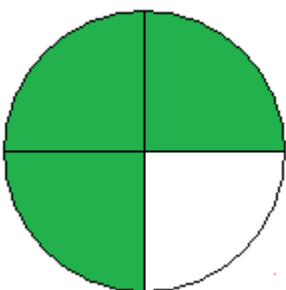
---



---



---



$\frac{3}{4}$      $\frac{1}{10}$      $\frac{15}{20}$

---



---



---

Ergebnis:

     / 9 P: