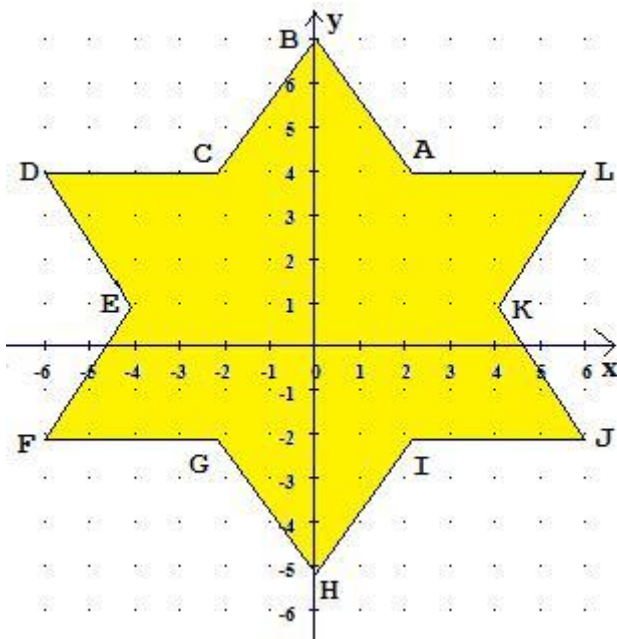


Klapptest – Koordinatensystem 2

Falte das Blatt entlang der Linie und berechne.

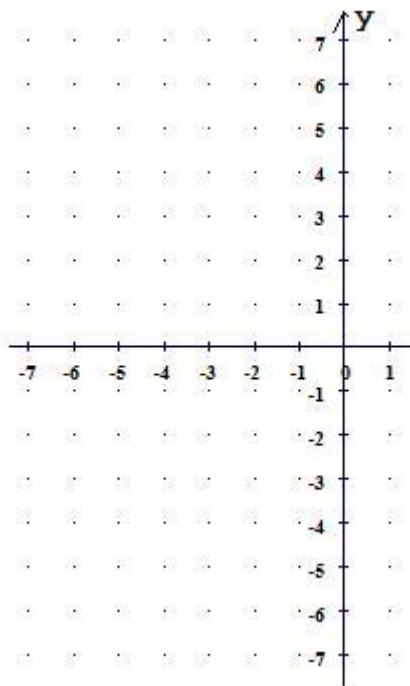
1. Aufgabe: Schreibe die Koordinaten auf.



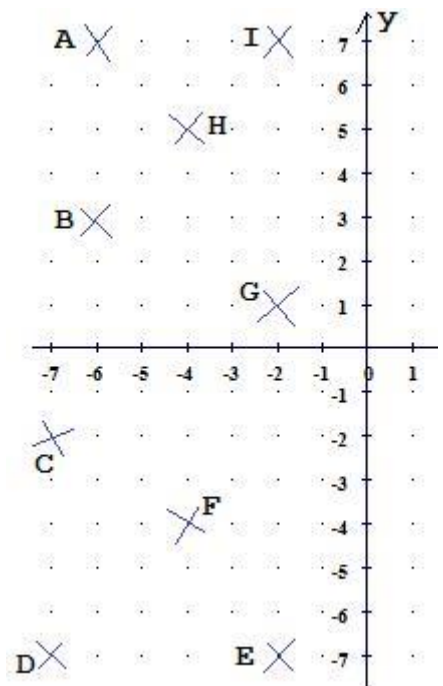
- A (___/___)
- B (___/___)
- C (___/___)
- D (___/___)
- E (___/___)
- F (___/___)
- G (___/___)
- H (___/___)
- I (___/___)
- J (___/___)
- K (___/___)
- L (___/___)

- A (2/4)
- B (0/7)
- C (-2/4)
- D (-6/4)
- E (-4/1)
- F (-6/-2)
- G (-2/-2)
- H (0/-5)
- I (2/-4)
- J (6/-2)
- K (4/1)
- L (6/4)

2. Aufgabe: Trage die Punkte ein.



- A (-6/7)
- B (-6/3)
- C (-7/-2)
- D (-7/-7)
- E (-2/-7)
- F (-4/-4)
- G (-2/1)
- H (-4/5)
- I (-2/7)



Ergebnis: