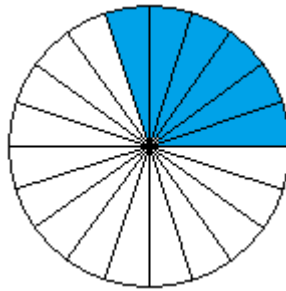
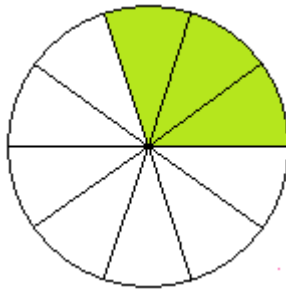
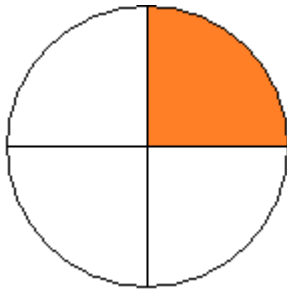




Klapptest - Bruchteile 1

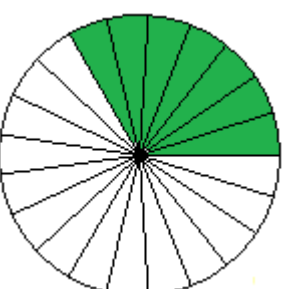
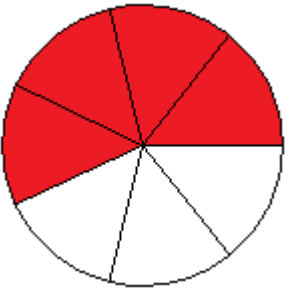
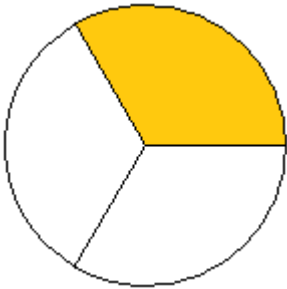
Falte das Blatt entlang der Linie. Welche Brüche werden dargestellt? Schreibe die Bruchzahlen auf die Linie..



$$\frac{1}{4}$$

$$\frac{3}{10}$$

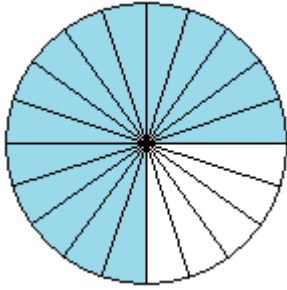
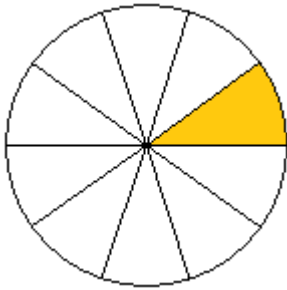
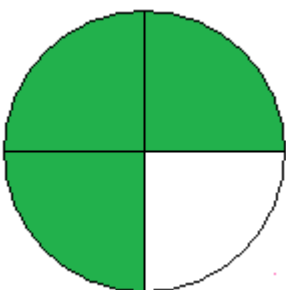
$$\frac{6}{20}$$



$$\frac{1}{3}$$

$$\frac{4}{7}$$

$$\frac{7}{21}$$



$$\frac{3}{4}$$

$$\frac{1}{10}$$

$$\frac{15}{20}$$

Ergebnis:
 / 9P.