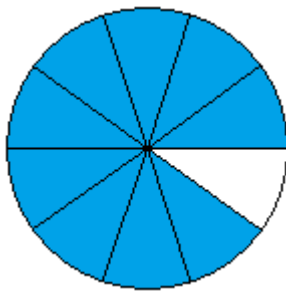
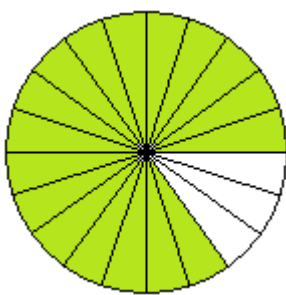
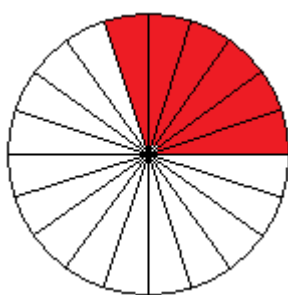
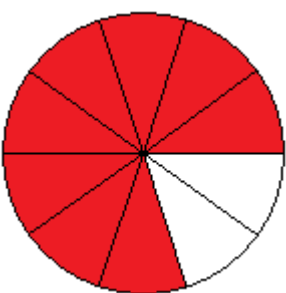
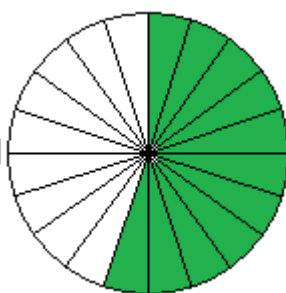
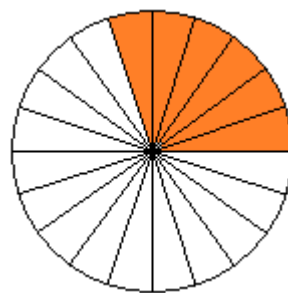


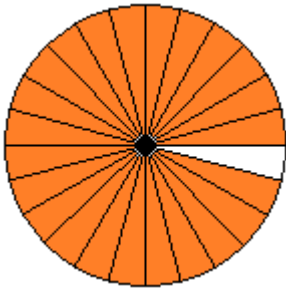
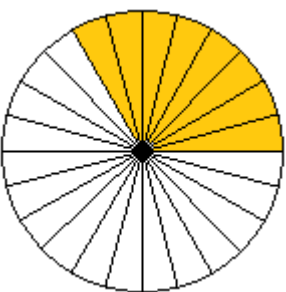
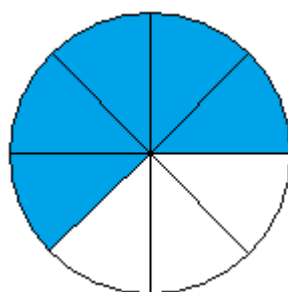


Klapptest - Bruchteile 2

Falte das Blatt entlang der Linie. Welche Brüche werden dargestellt? Schreibe die Bruchzahlen auf die Linie..







$$\frac{6}{20} \quad \frac{17}{20} \quad \frac{9}{10}$$

$$\frac{6}{20} \quad \frac{11}{20} \quad \frac{8}{10}$$

$$\frac{5}{8} \quad \frac{8}{24} \quad \frac{23}{24}$$

Ergebnis:

 / 9P.