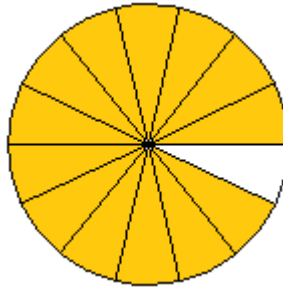
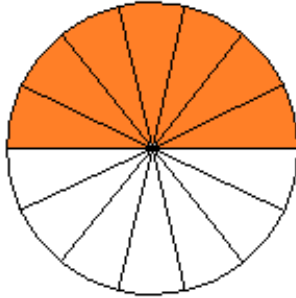
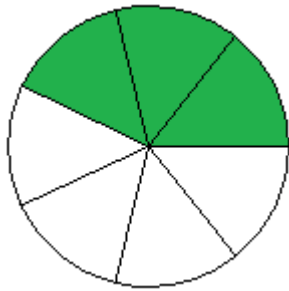


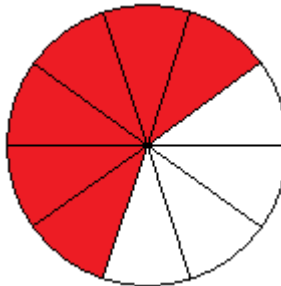
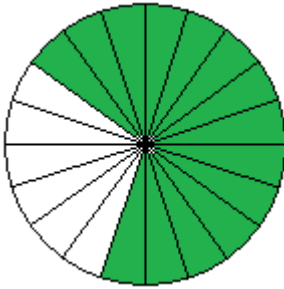
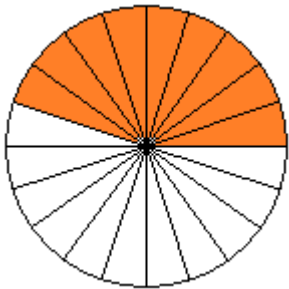
Klapptest - Bruchteile 3



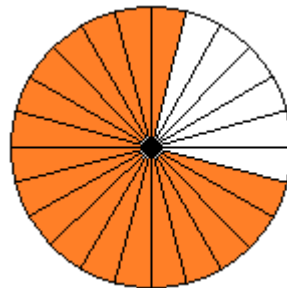
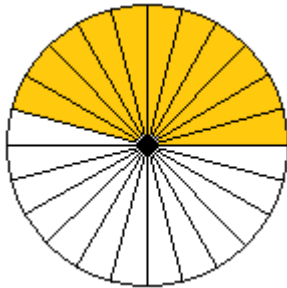
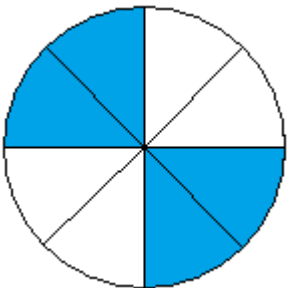
Falte das Blatt entlang der Linie. Welche Brüche werden dargestellt? Schreibe die Bruchzahlen auf die Linie..



$$\frac{3}{7} \quad \frac{7}{14} \quad \frac{13}{14}$$



$$\frac{9}{20} \quad \frac{14}{20} \quad \frac{6}{10}$$



$$\frac{4}{8} \quad \frac{11}{24} \quad \frac{18}{24}$$

Ergebnis:

 / 9P.